

Match My Part


Name: _____

Teacher: _____

Date: _____

1. Draw a line connecting each pair of cards that are equal in value to each other.

60%



$$\frac{3}{4}$$

0.80

$$\frac{3}{5}$$


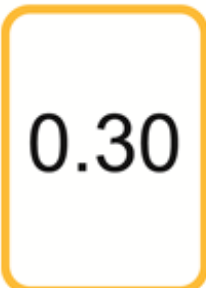
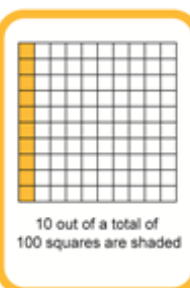

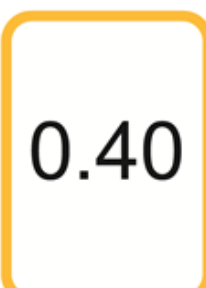
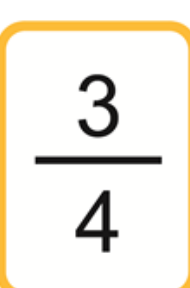
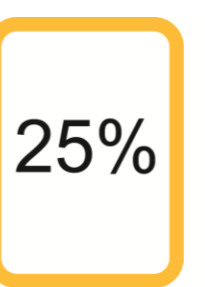

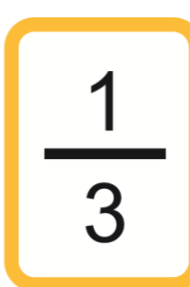
80%

2. Which is equivalent to 75% ?

- a) .34
- b) 75 parts out of 100
- c) $\frac{3}{5}$
- d) $\frac{7}{5}$

Please turn the page

3. Which set of cards add up to equal to one whole?

a)			
b)			
c)			
d)	